






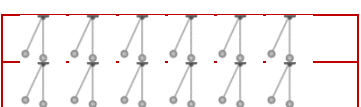




Name \_\_\_\_\_

Date \_\_\_\_\_

### Visual Arrays Worksheet

Fill in the missing numbers.

<p>1</p>  <p>___ rows, ___ combs in each row          ___ + ___ combs          ___ x ___ combs = ___</p>	<p>2</p>  <p>___ rows, ___ candles in each row          ___ + ___ candles          ___ x ___ candles = ___</p>
<p>3</p>  <p>___ rows, ___ footballs in each row          ___ + ___ footballs          ___ x ___ footballs = ___</p>	<p>4</p>  <p>___ rows, ___ eagles in each row          ___ + ___ eagles          ___ x ___ eagles = ___</p>
<p>5</p>  <p>___ rows, ___ notes in each row          ___ + ___ notes          ___ x ___ notes = ___</p>	<p>6</p>  <p>___ rows, ___ coins in each row          ___ + ___ coins          ___ x ___ coins = ___</p>
<p>7</p>  <p>___ rows, ___ cats in each row          ___ + ___ cats          ___ x ___ cats = ___</p>	<p>8</p>  <p>___ rows, ___ pendulums each row          ___ + ___ pendulums          ___ x ___ pendulums = ___</p>
<p>9</p>  <p>___ rows, ___ snowmen in each row          ___ + ___ snowmen          ___ x ___ snowmen = ___</p>	<p>10</p>  <p>___ rows, ___ saws in each row          ___ + ___ saws          ___ x ___ saws = ___</p>

