

Visual Multiplication - Independent Practice Worksheet

Solve the following multiplications:

1.


2 rows of 2



$2 \times 2 = \underline{\quad}$

2.


3 rows of 6



$3 \times 6 = \underline{\quad}$

3.

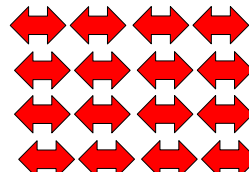
4 rows of 5



$4 \times 5 = \underline{\quad}$

4.

4 rows of 4



$4 \times 4 = \underline{\quad}$

5.

2 rows of 6



$2 \times 6 = \underline{\quad}$

6.

1 row of 8



$1 \times 8 = \underline{\quad}$

7.

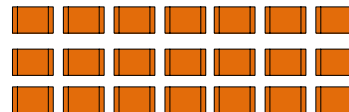
3 rows of 1



$3 \times 1 = \underline{\quad}$

8.


3 rows of 7



$3 \times 7 = \underline{\quad}$

9.

6 rows of 8



$6 \times 8 = \underline{\quad}$

10.

7 rows of 2



$7 \times 2 = \underline{\quad}$

