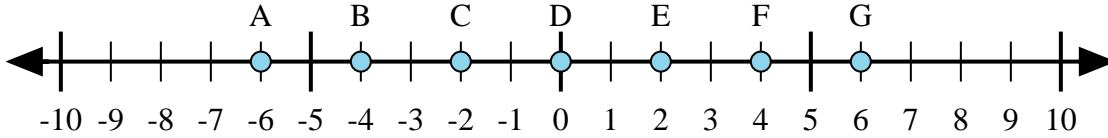
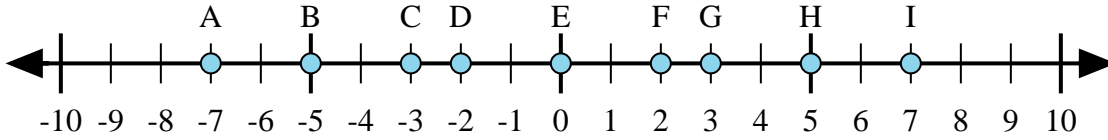




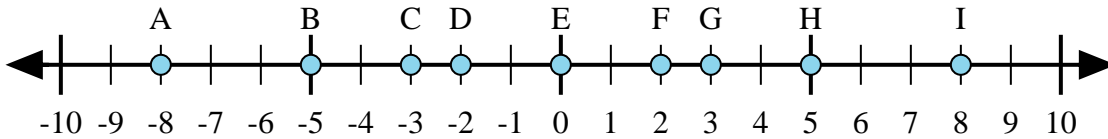
Determine which letter in the numberline best represents the answer to each problem.



- 1) $(-4) + 2 =$
- 2) $2 + 4 =$
- 3) $(-2) + 4 =$
- 4) $4 + (-2) =$
- 5) $2 + (-4) =$



- 6) $(-2) + 5 =$
- 7) $5 + (-2) =$
- 8) $5 + 2 =$
- 9) $2 + (-5) =$
- 10) $(-5) + 2 =$



- 11) $5 + (-3) =$
- 12) $(-3) + 5 =$
- 13) $3 + (-5) =$
- 14) $(-5) + (-3) =$
- 15) $(-5) + 3 =$

Answers

1. _____
2. _____
3. _____
4. _____
5. _____
6. _____
7. _____
8. _____
9. _____
10. _____
11. _____
12. _____
13. _____
14. _____
15. _____