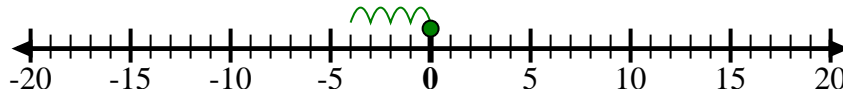




Use the numberlines to show each expression and solve.

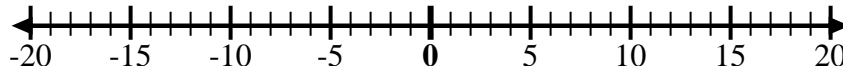
Ex) Start at 0 and add -4



Answers

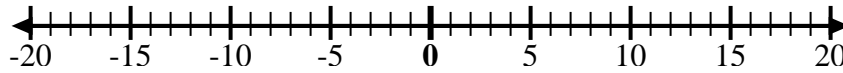
Ex. $0 + -4 = -4$

1) Start at 4 and add -13



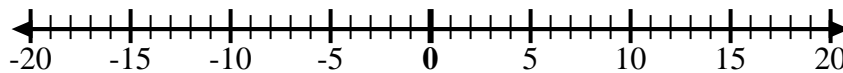
1. _____

2) Start at 3 and add -9



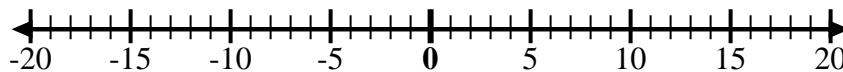
2. _____

3) Start at -5 and add -2



3. _____

4) Start at -2 and add 6



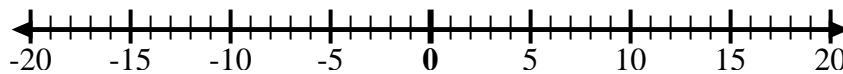
4. _____

5) Start at 0 and add -9



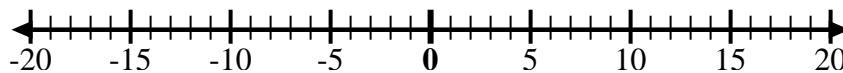
5. _____

6) Start at 3 and add -7



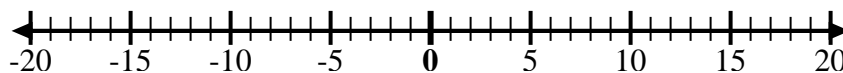
6. _____

7) Start at 0 and add 5



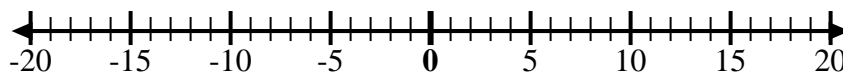
7. _____

8) Start at -7 and add 2



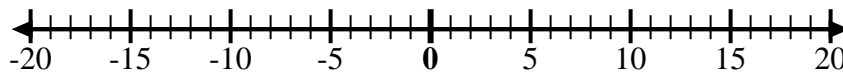
8. _____

9) Start at 5 and add -10



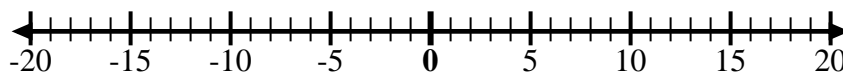
9. _____

10) Start at 0 and add -6



10. _____

11) Start at -7 and add 13



11. _____

12) Start at 4 and add -12



12. _____