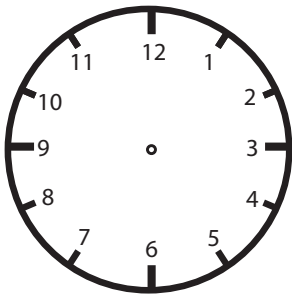

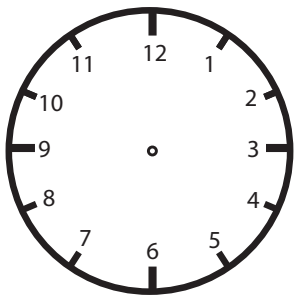


Write the Time

Look at the clocks below and follow the directions.



It's two forty. Write the time in digital form.
Then draw hands on the analog clock to show the time.



It's half past eleven. Write the time in digital form.
Then draw hands on the analog clock to show the time.

How do you read the time? Look at each time, then write how you say it on the line.
See the example.

1:30 one thirty or half past one

4:15 _____ or _____

5:45 _____ or _____

7:30 _____ or _____

9:15 _____ or _____